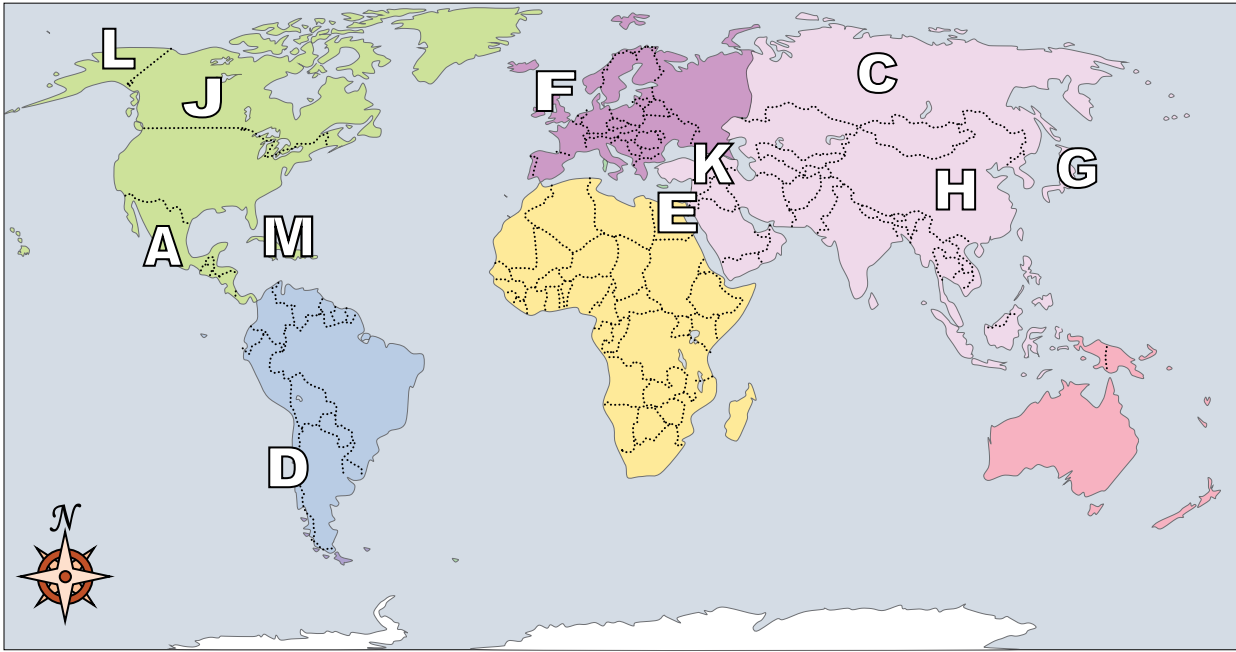




Using the map below, determine which letter represents each location.



Answers

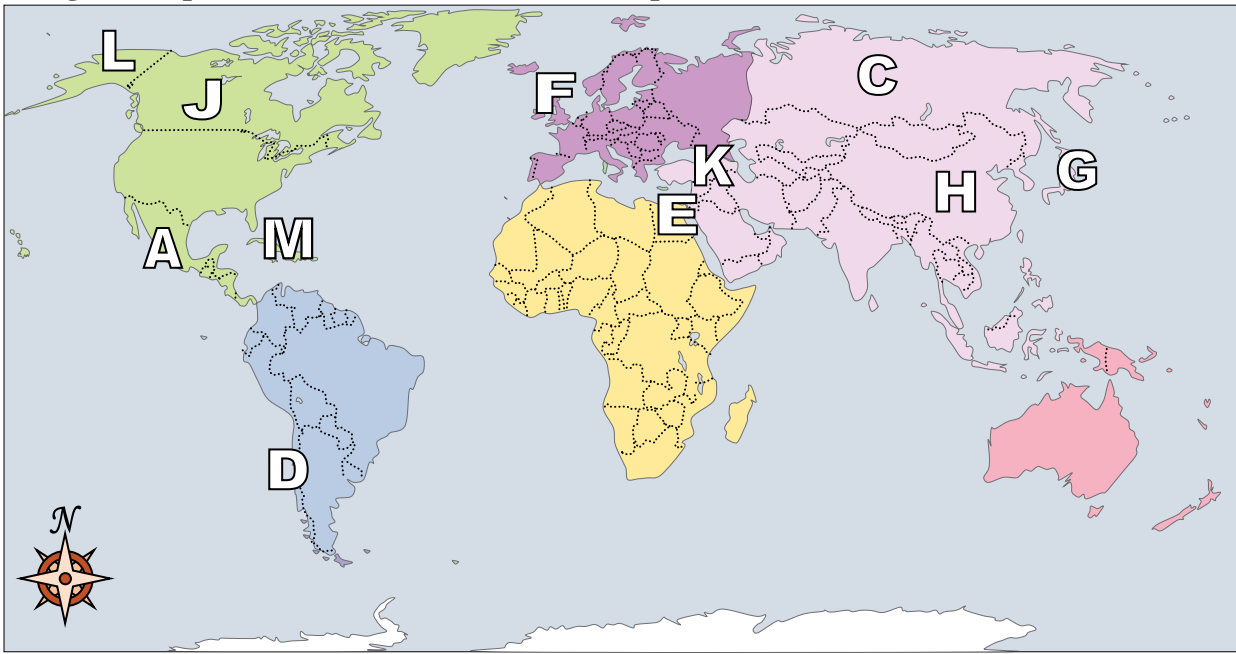
1. _____
2. _____
3. _____
4. _____
5. _____
6. _____
7. _____
8. _____
9. _____
10. _____
11. _____
12. _____
13. _____
14. _____
15. _____
16. _____
17. _____

- 1) Iraq _____
- 2) Canada _____
- 3) Mexico _____
- 4) Chile _____
- 5) Russia _____
- 6) Egypt _____
- 7) Alaska (State) _____
- 8) Cuba _____
- 9) United Kingdom _____
- 10) Japan _____
- 11) Britain _____
- 12) China _____

- 13) Which country is the largest in Asia?
 A. Russia B. Egypt C. Mexico D. Canada
- 14) If you wanted to see pyramids where should you go?
 A. Egypt B. France C. Canada D. Britain
- 15) Which country touches the USA's northern border?
 A. Canada B. France C. Japan D. Britain
- 16) Which country attacked the United State's base at Pearl Harbor during World War 2?
 A. Japan B. Egypt C. Mexico D. China
- 17) The state of Alaska is touching which country?
 A. Canada B. Egypt C. France D. Russia



Using the map below, determine which letter represents each location.



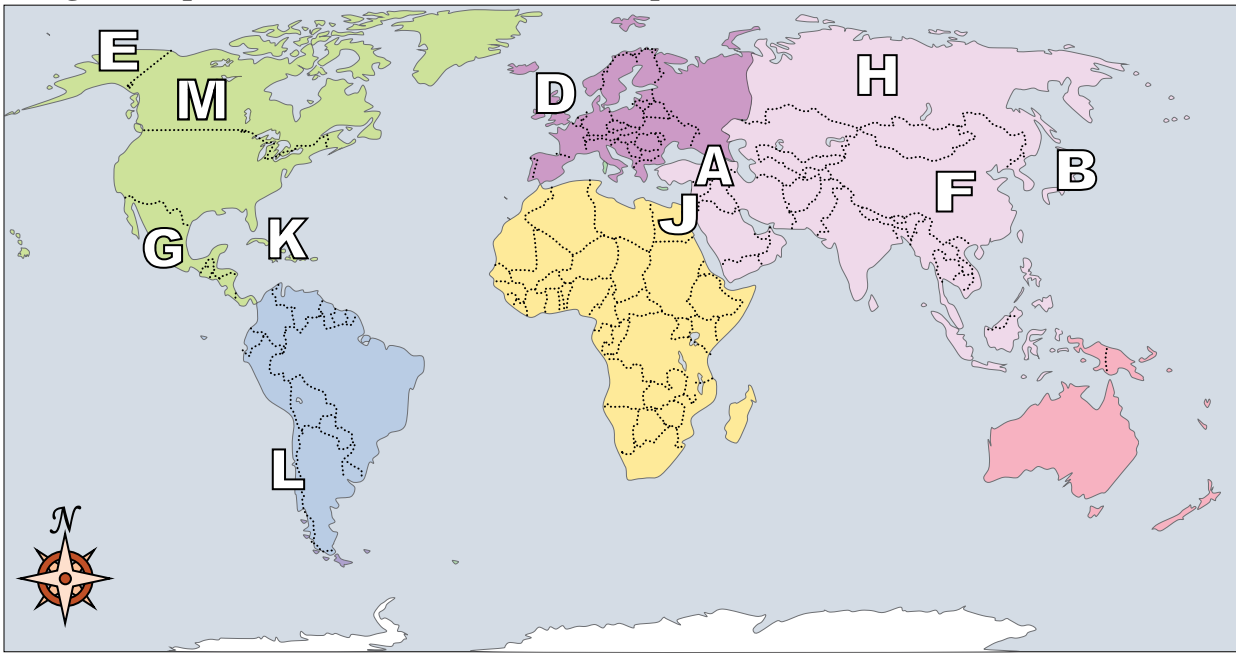
Answers

- 1) Iraq K
- 2) Canada J
- 3) Mexico A
- 4) Chile D
- 5) Russia C
- 6) Egypt E
- 7) Alaska (State) L
- 8) Cuba M
- 9) United Kingdom F
- 10) Japan G
- 11) Britain B
- 12) China H
- 13) Which country is the largest in Asia?
A. Russia B. Egypt C. Mexico D. Canada
- 14) If you wanted to see pyramids where should you go?
A. Egypt B. France C. Canada D. Britain
- 15) Which country touches the USA's northern border?
A. Canada B. France C. Japan D. Britain
- 16) Which country attacked the United State's base at Pearl Harbor during World War 2?
A. Japan B. Egypt C. Mexico D. China
- 17) The state of Alaska is touching which country?
A. Canada B. Egypt C. France D. Russia

- 1. K
- 2. J
- 3. A
- 4. D
- 5. C
- 6. E
- 7. L
- 8. M
- 9. F
- 10. G
- 11. B
- 12. H
- 13. A
- 14. A
- 15. A
- 16. A
- 17. A



Using the map below, determine which letter represents each location.



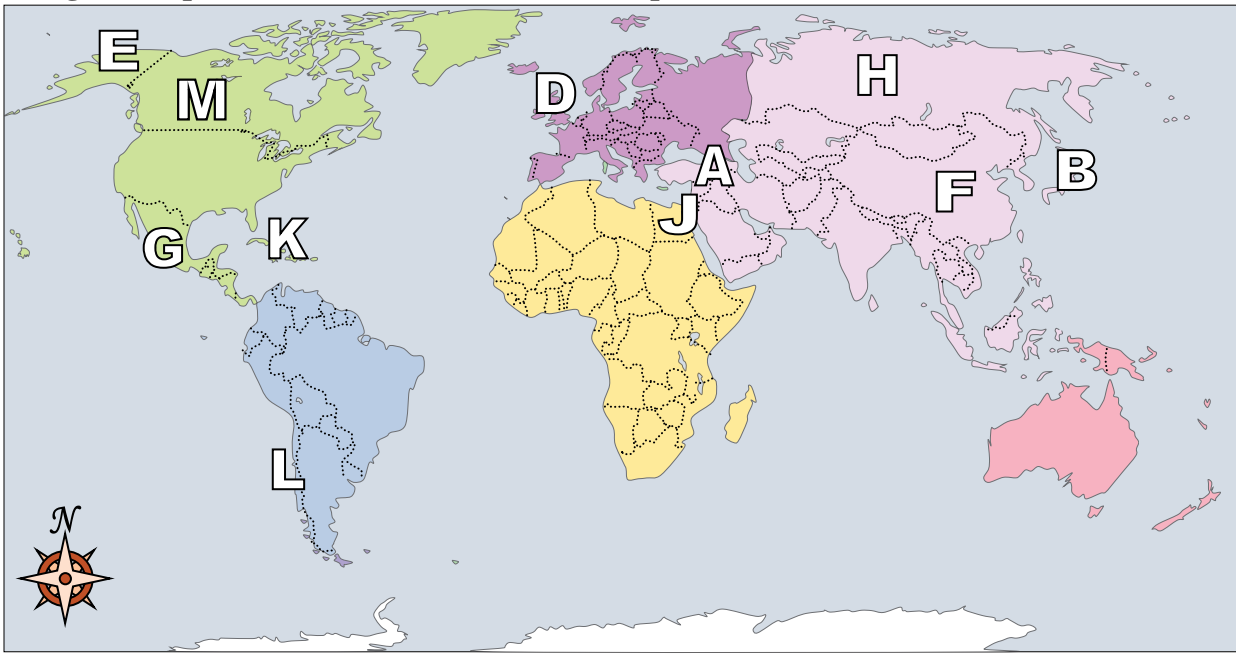
Answers

1. _____
2. _____
3. _____
4. _____
5. _____
6. _____
7. _____
8. _____
9. _____
10. _____
11. _____
12. _____
13. _____
14. _____
15. _____
16. _____
17. _____

- 1) China _____
- 2) United Kingdom _____
- 3) Cuba _____
- 4) Britain _____
- 5) Russia _____
- 6) Iraq _____
- 7) Mexico _____
- 8) Canada _____
- 9) Chile _____
- 10) Japan _____
- 11) Alaska (State) _____
- 12) Egypt _____
- 13) Which country touches the USA's northern border?
 A. Britain B. Canada C. Mexico D. Egypt
- 14) Alaska is _____ of the rest of the United States?
 A. east B. south C. west D. north
- 15) Which country attacked the United State's base at Pearl Harbor during World War 2?
 A. China B. Mexico C. Japan D. France
- 16) Who was the United States of America at war with during the American Revolution?
 A. France B. Britain C. Japan D. Mexico
- 17) Which is not part of North America?
 A. Alaska B. Mexico C. Canada D. Britain



Using the map below, determine which letter represents each location.



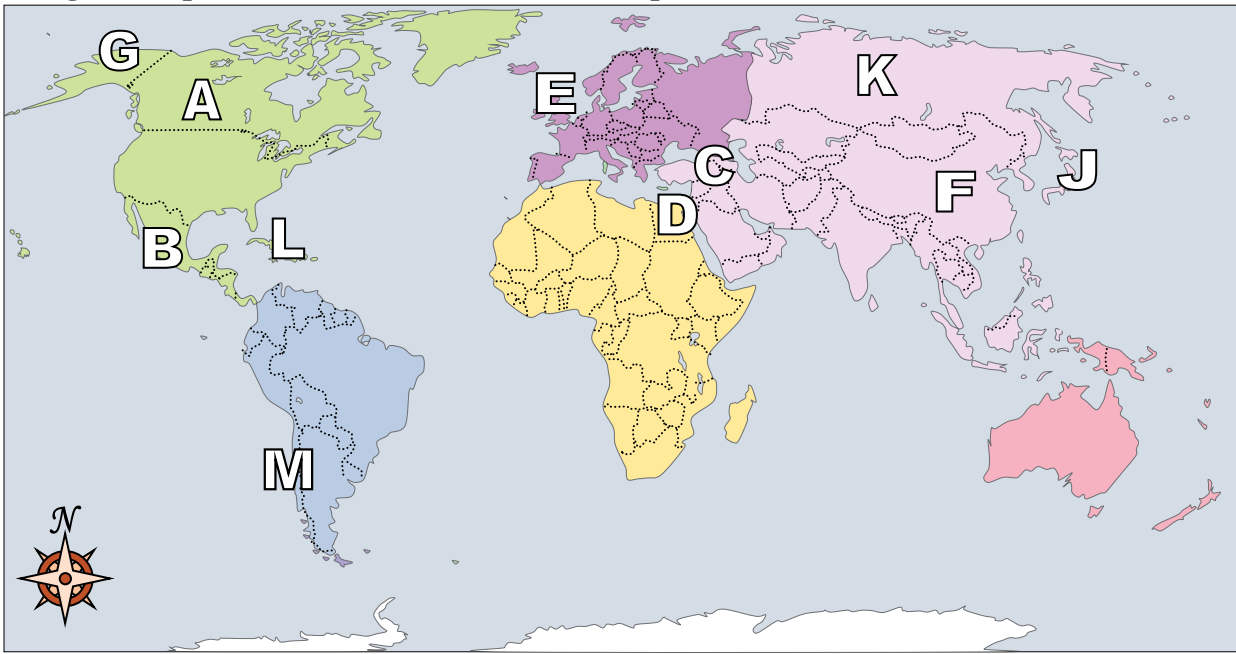
Answers

- 1) China **F**
- 2) United Kingdom **D**
- 3) Cuba **K**
- 4) Britain **C**
- 5) Russia **H**
- 6) Iraq **A**
- 7) Mexico **G**
- 8) Canada **M**
- 9) Chile **L**
- 10) Japan **B**
- 11) Alaska (State) **E**
- 12) Egypt **J**
- 13) Which country touches the USA's northern border?
 A. Britain B. Canada C. Mexico D. Egypt
- 14) Alaska is _____ of the rest of the United States?
 A. east B. south C. west D. north
- 15) Which country attacked the United State's base at Pearl Harbor during World War 2?
 A. China B. Mexico C. Japan D. France
- 16) Who was the United States of America at war with during the American Revolution?
 A. France B. Britain C. Japan D. Mexico
- 17) Which is not part of North America?
 A. Alaska B. Mexico C. Canada D. Britain

- 1. **F**
- 2. **D**
- 3. **K**
- 4. **C**
- 5. **H**
- 6. **A**
- 7. **G**
- 8. **M**
- 9. **L**
- 10. **B**
- 11. **E**
- 12. **J**
- 13. **B**
- 14. **D**
- 15. **C**
- 16. **B**
- 17. **D**



Using the map below, determine which letter represents each location.



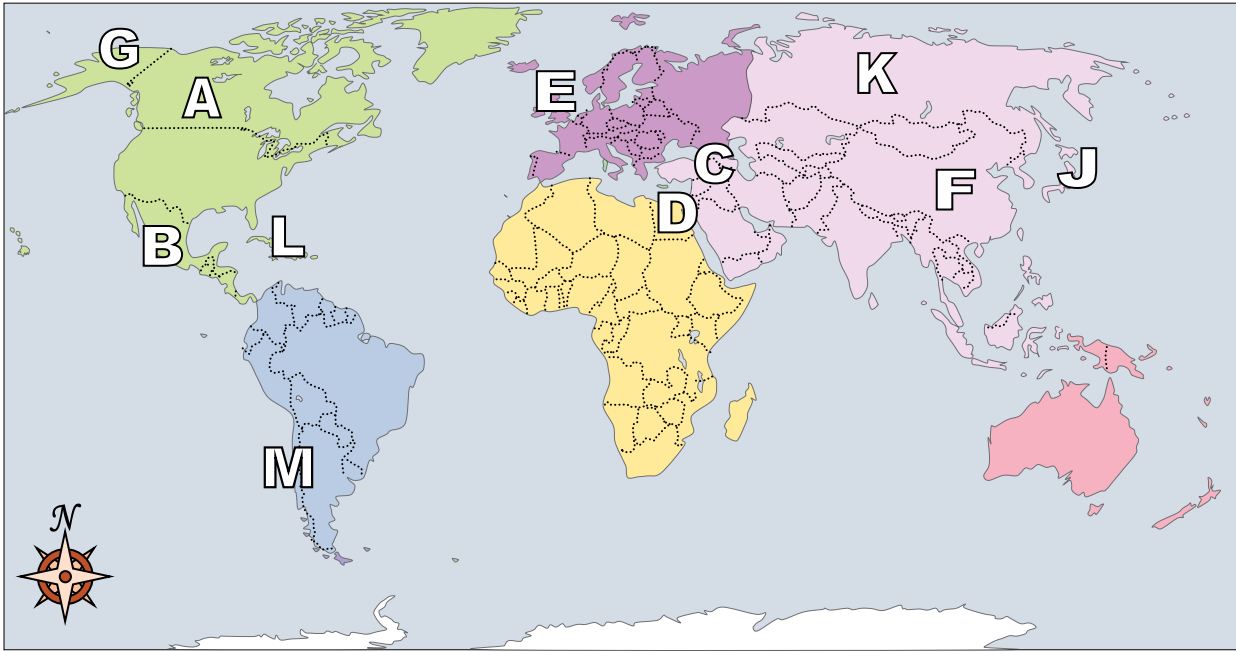
Answers

1. _____
2. _____
3. _____
4. _____
5. _____
6. _____
7. _____
8. _____
9. _____
10. _____
11. _____
12. _____
13. _____
14. _____
15. _____
16. _____
17. _____

- 1) Russia _____
- 2) Japan _____
- 3) Alaska (State) _____
- 4) Chile _____
- 5) China _____
- 6) Britain _____
- 7) Iraq _____
- 8) Canada _____
- 9) Egypt _____
- 10) Mexico _____
- 11) Cuba _____
- 12) United Kingdom _____
- 13) If you wanted to see pyramids where should you go?
A. China B. Egypt C. France D. Mexico
- 14) Which is not part of North America?
A. Mexico B. The United States C. Canada D. Russia
- 15) Which country touches the USA's southern border?
A. Mexico B. Canada C. Japan D. Britain
- 16) Which country is the largest in Asia?
A. China B. Mexico C. Russia D. Japan
- 17) Which country is closest to the state of Florida?
A. Cuba B. Canada C. Japan D. Egypt



Using the map below, determine which letter represents each location.



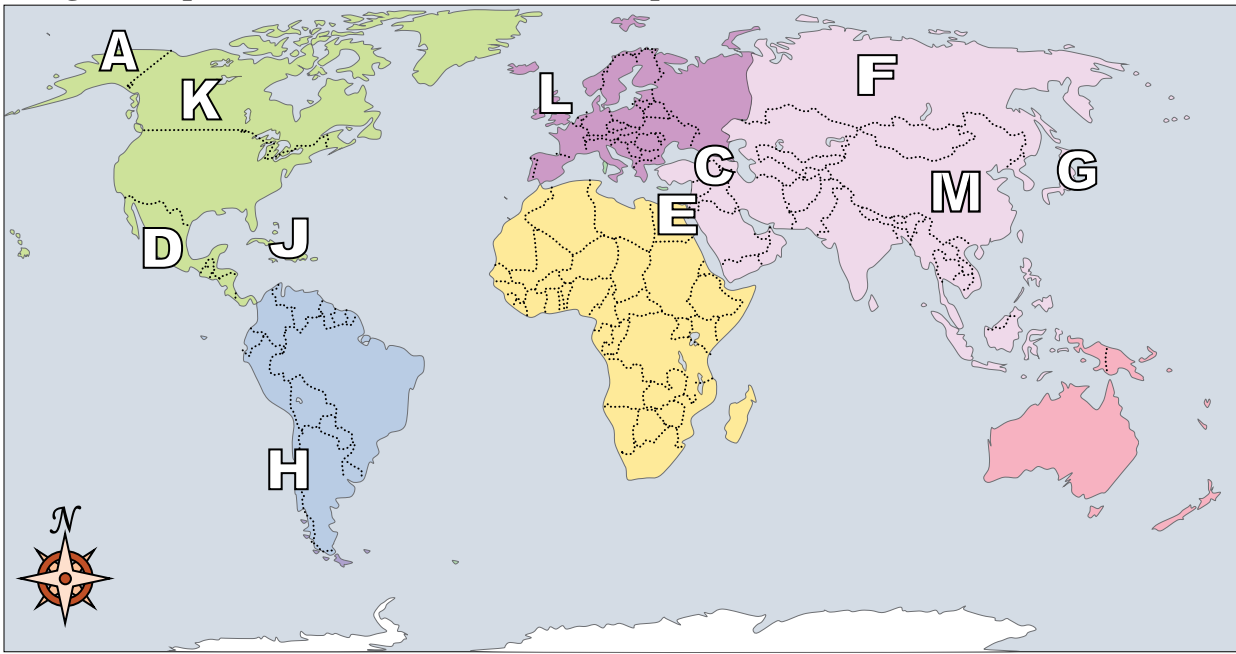
Answers

- 1) Russia K
- 2) Japan J
- 3) Alaska (State) G
- 4) Chile M
- 5) China F
- 6) Britain H
- 7) Iraq C
- 8) Canada A
- 9) Egypt D
- 10) Mexico B
- 11) Cuba L
- 12) United Kingdom E
- 13) If you wanted to see pyramids where should you go?
A. China B. Egypt C. France D. Mexico
- 14) Which is not part of North America?
A. Mexico B. The United States C. Canada D. Russia
- 15) Which country touches the USA's southern border?
A. Mexico B. Canada C. Japan D. Britain
- 16) Which country is the largest in Asia?
A. China B. Mexico C. Russia D. Japan
- 17) Which country is closest to the state of Florida?
A. Cuba B. Canada C. Japan D. Egypt

- 1. K
- 2. J
- 3. G
- 4. M
- 5. F
- 6. H
- 7. C
- 8. A
- 9. D
- 10. B
- 11. L
- 12. E
- 13. B
- 14. D
- 15. A
- 16. C
- 17. A



Using the map below, determine which letter represents each location.



Answers

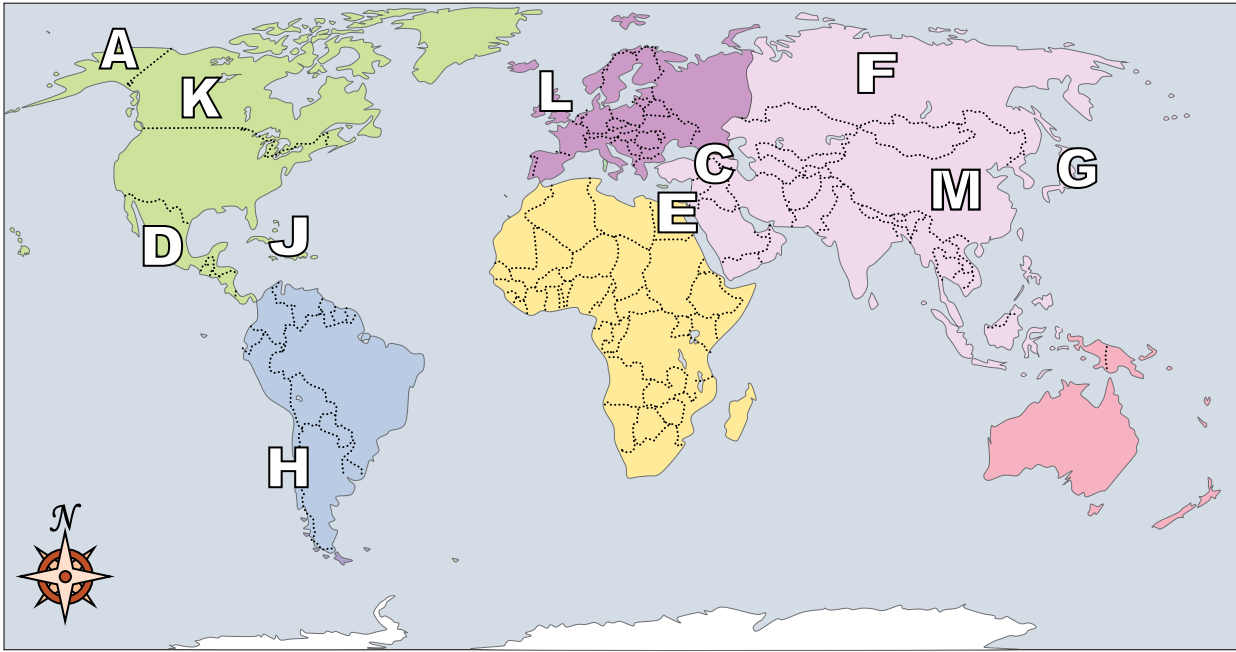
1. _____
2. _____
3. _____
4. _____
5. _____
6. _____
7. _____
8. _____
9. _____
10. _____
11. _____
12. _____
13. _____
14. _____
15. _____
16. _____
17. _____

- 1) Japan _____
- 2) Iraq _____
- 3) Chile _____
- 4) Alaska (State) _____
- 5) Mexico _____
- 6) Canada _____
- 7) Egypt _____
- 8) Britain _____
- 9) Russia _____
- 10) China _____
- 11) United Kingdom _____
- 12) Cuba _____
- 13) Which country touches the USA's northern border?
 A. Japan B. Egypt C. Canada D. France
- 14) Which country touches the USA's southern border?
 A. Britain B. Mexico C. China D. Japan
- 15) Which is not part of North America?
 A. Japan B. The United States C. Canada D. Alaska
- 16) Which country is the largest in Asia?
 A. Russia B. Canada C. Japan D. Egypt
- 17) If you wanted to see pyramids where should you go?
 A. Britain B. Egypt C. China D. Japan

1-10	94	88	82	76	71	65	59	53	47	41
11-17	35	29	24	18	12	6	0			



Using the map below, determine which letter represents each location.



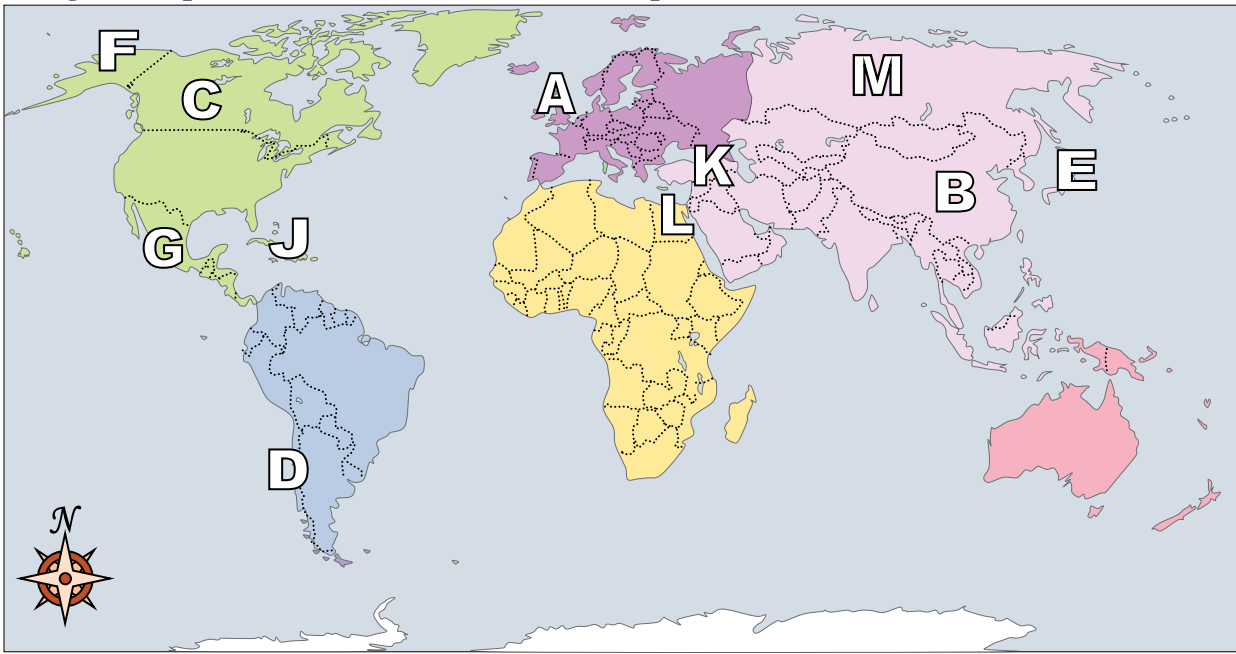
Answers

- 1) Japan G
- 2) Iraq C
- 3) Chile H
- 4) Alaska (State) A
- 5) Mexico D
- 6) Canada K
- 7) Egypt E
- 8) Britain B
- 9) Russia F
- 10) China M
- 11) United Kingdom L
- 12) Cuba J
- 13) Which country touches the USA's northern border?
A. Japan B. Egypt C. Canada D. France
- 14) Which country touches the USA's southern border?
A. Britain B. Mexico C. China D. Japan
- 15) Which is not part of North America?
A. Japan B. The United States C. Canada D. Alaska
- 16) Which country is the largest in Asia?
A. Russia B. Canada C. Japan D. Egypt
- 17) If you wanted to see pyramids where should you go?
A. Britain B. Egypt C. China D. Japan

- 1. G
- 2. C
- 3. H
- 4. A
- 5. D
- 6. K
- 7. E
- 8. B
- 9. F
- 10. M
- 11. L
- 12. J
- 13. C
- 14. B
- 15. A
- 16. A
- 17. B



Using the map below, determine which letter represents each location.



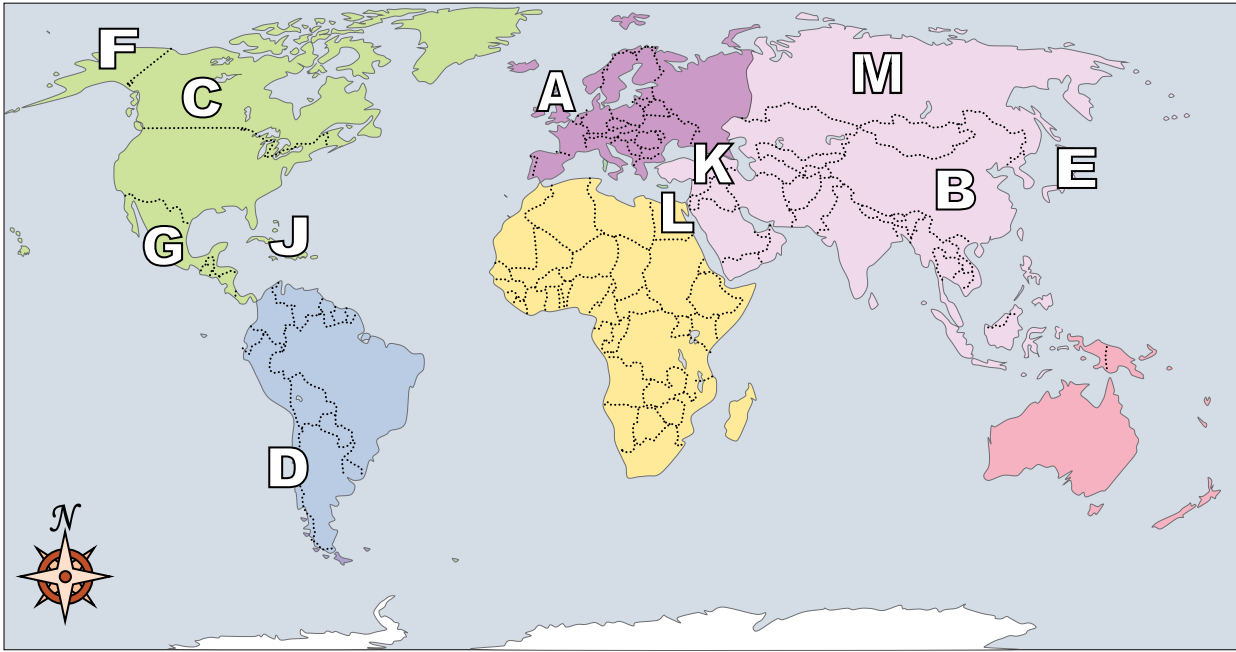
Answers

1. _____
2. _____
3. _____
4. _____
5. _____
6. _____
7. _____
8. _____
9. _____
10. _____
11. _____
12. _____
13. _____
14. _____
15. _____
16. _____
17. _____

- 1) Britain _____
- 2) Russia _____
- 3) Egypt _____
- 4) Mexico _____
- 5) Alaska (State) _____
- 6) Iraq _____
- 7) Chile _____
- 8) China _____
- 9) Cuba _____
- 10) Japan _____
- 11) United Kingdom _____
- 12) Canada _____
- 13) Which country attacked the United State's base at Pearl Harbor during World War 2?
A. France B. China C. Mexico D. Japan
- 14) Which country touches the USA's southern border?
A. China B. Mexico C. Egypt D. France
- 15) Who was the United States of America at war with during the American Revolution?
A. China B. Mexico C. Egypt D. Britain
- 16) Alaska is _____ of the rest of the United States?
A. south B. west C. east D. north
- 17) Which country is the largest in Asia?
A. France B. Russia C. Mexico D. China



Using the map below, determine which letter represents each location.



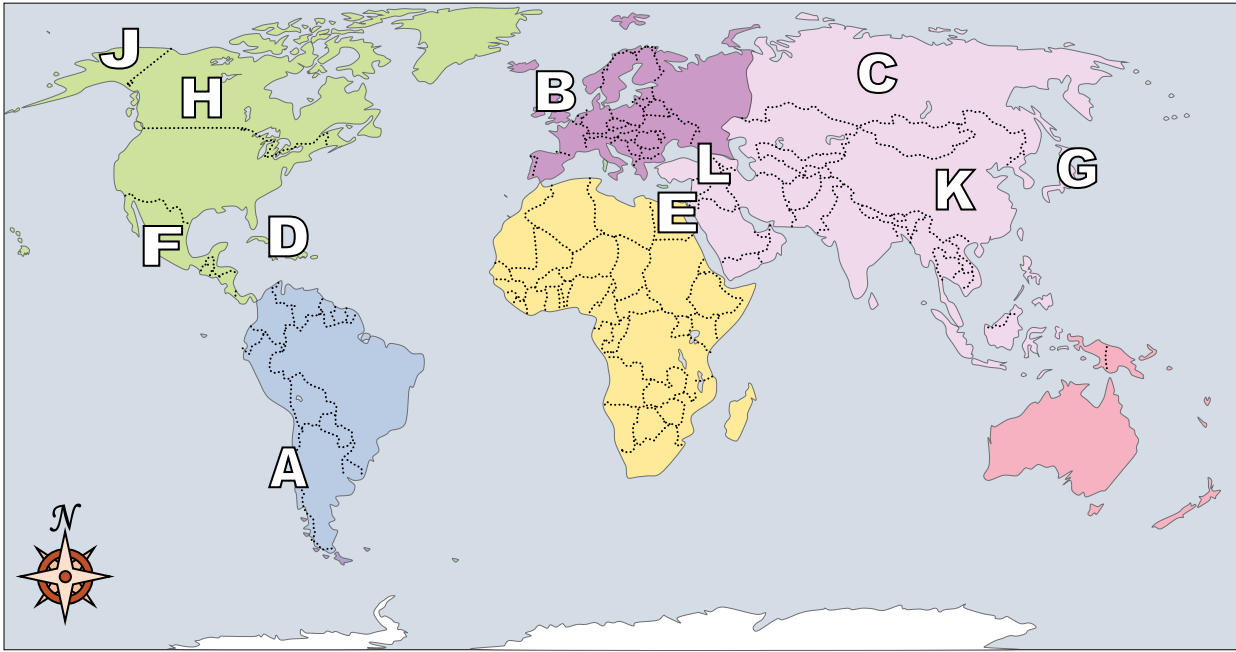
Answers

- 1) Britain H
- 2) Russia M
- 3) Egypt L
- 4) Mexico G
- 5) Alaska (State) F
- 6) Iraq K
- 7) Chile D
- 8) China B
- 9) Cuba J
- 10) Japan E
- 11) United Kingdom A
- 12) Canada C
- 13) Which country attacked the United State's base at Pearl Harbor during World War 2?
A. France B. China C. Mexico D. Japan
- 14) Which country touches the USA's southern border?
A. China B. Mexico C. Egypt D. France
- 15) Who was the United States of America at war with during the American Revolution?
A. China B. Mexico C. Egypt D. Britain
- 16) Alaska is _____ of the rest of the United States?
A. south B. west C. east D. north
- 17) Which country is the largest in Asia?
A. France B. Russia C. Mexico D. China

- 1. H
- 2. M
- 3. L
- 4. G
- 5. F
- 6. K
- 7. D
- 8. B
- 9. J
- 10. E
- 11. A
- 12. C
- 13. D
- 14. B
- 15. D
- 16. D
- 17. B



Using the map below, determine which letter represents each location.



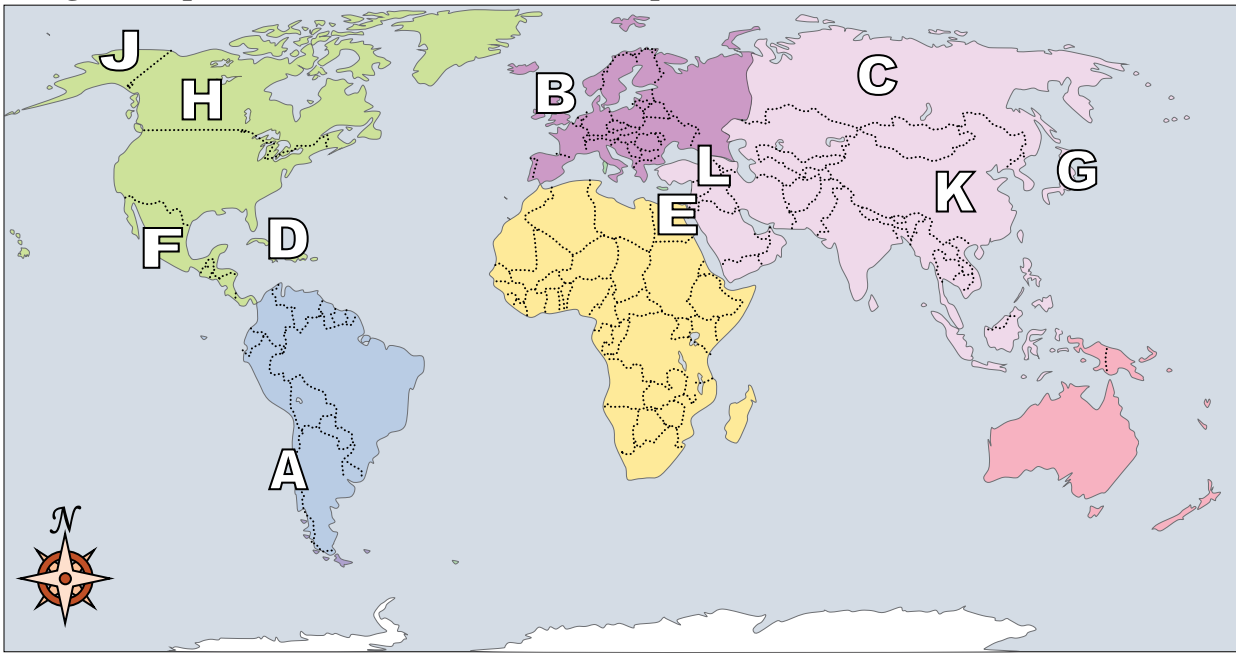
Answers

1. _____
2. _____
3. _____
4. _____
5. _____
6. _____
7. _____
8. _____
9. _____
10. _____
11. _____
12. _____
13. _____
14. _____
15. _____
16. _____
17. _____

- 1) Cuba _____
- 2) Britain _____
- 3) China _____
- 4) United Kingdom _____
- 5) Mexico _____
- 6) Canada _____
- 7) Russia _____
- 8) Alaska (State) _____
- 9) Japan _____
- 10) Chile _____
- 11) Egypt _____
- 12) Iraq _____
- 13) Which is not part of North America?
A. Mexico B. Alaska C. Japan D. Canada
- 14) Which country is closest to the state of Florida?
A. Cuba B. Japan C. China D. Mexico
- 15) Alaska is _____ of the rest of the United States?
A. north B. south C. east D. west
- 16) The state of Alaska is touching which country?
A. Canada B. Russia C. Britain D. Japan
- 17) Which country attacked the United State's base at Pearl Harbor during World War 2?
A. Mexico B. Egypt C. Britain D. Japan



Using the map below, determine which letter represents each location.



Answers

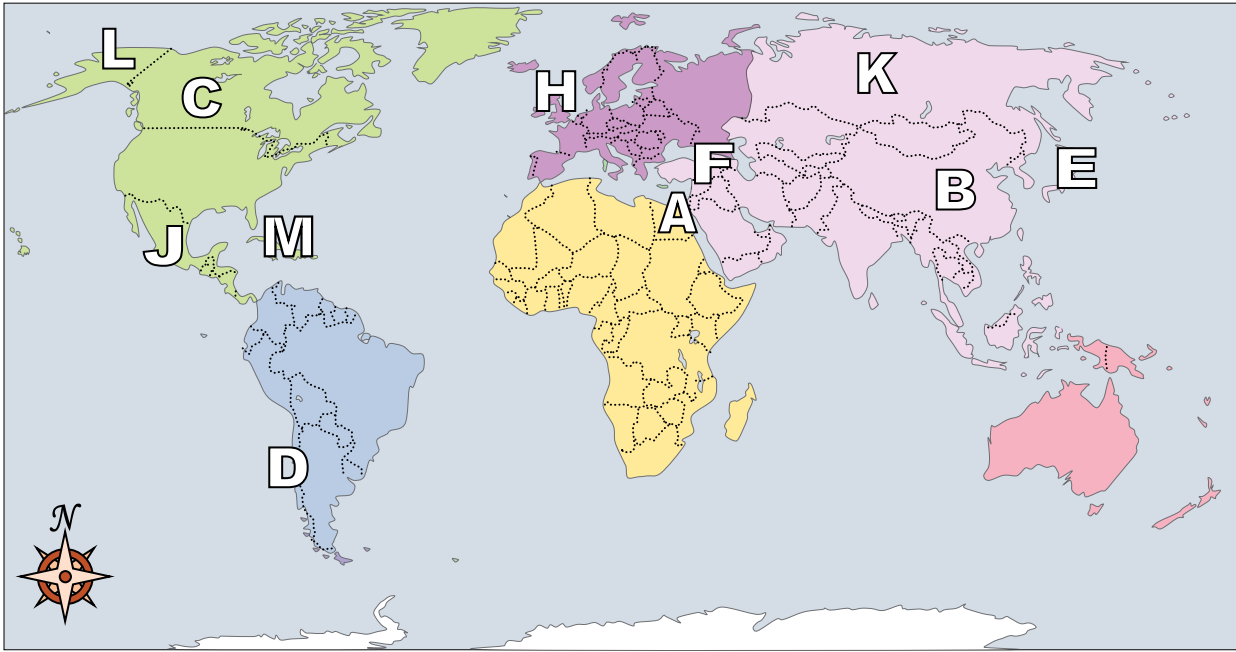
- 1) Cuba D
- 2) Britain M
- 3) China K
- 4) United Kingdom B
- 5) Mexico F
- 6) Canada H
- 7) Russia C
- 8) Alaska (State) J
- 9) Japan G
- 10) Chile A
- 11) Egypt E
- 12) Iraq L

- 13) Which is not part of North America?
A. Mexico B. Alaska C. Japan D. Canada
- 14) Which country is closest to the state of Florida?
A. Cuba B. Japan C. China D. Mexico
- 15) Alaska is _____ of the rest of the United States?
A. north B. south C. east D. west
- 16) The state of Alaska is touching which country?
A. Canada B. Russia C. Britain D. Japan
- 17) Which country attacked the United State's base at Pearl Harbor during World War 2?
A. Mexico B. Egypt C. Britain D. Japan

- 1. D
- 2. M
- 3. K
- 4. B
- 5. F
- 6. H
- 7. C
- 8. J
- 9. G
- 10. A
- 11. E
- 12. L
- 13. C
- 14. A
- 15. A
- 16. A
- 17. D



Using the map below, determine which letter represents each location.



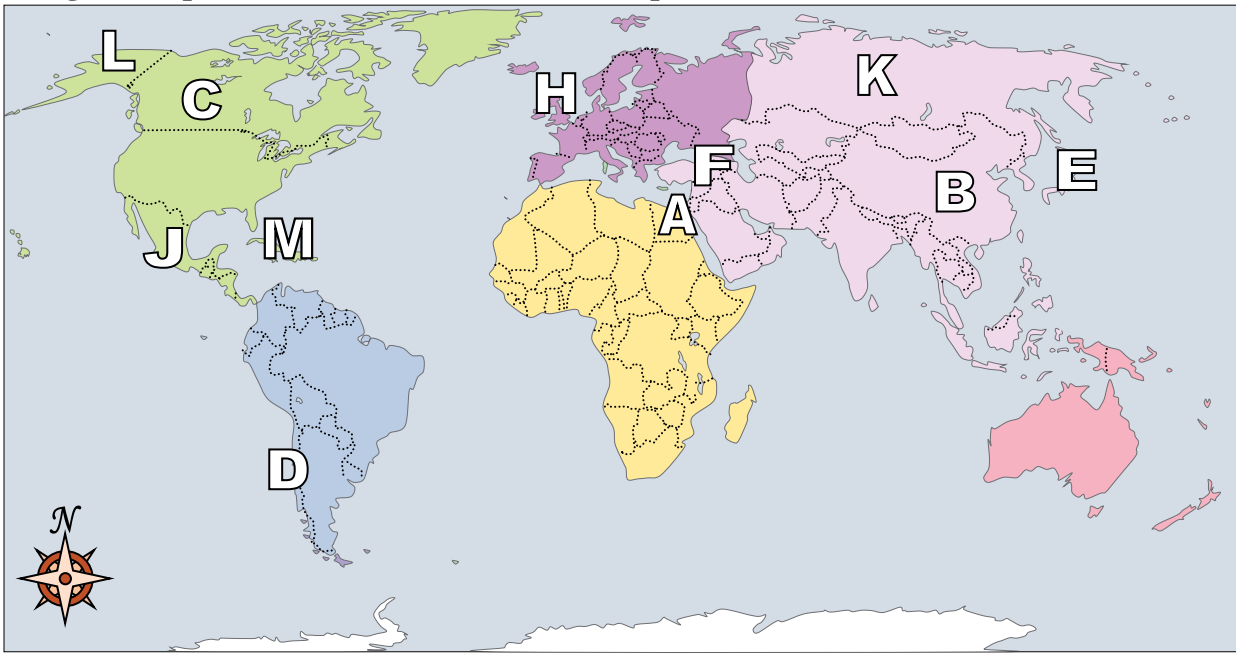
Answers

1. _____
2. _____
3. _____
4. _____
5. _____
6. _____
7. _____
8. _____
9. _____
10. _____
11. _____
12. _____
13. _____
14. _____
15. _____
16. _____
17. _____

- 1) Japan _____
- 2) Alaska (State) _____
- 3) Russia _____
- 4) United Kingdom _____
- 5) Iraq _____
- 6) Canada _____
- 7) China _____
- 8) Chile _____
- 9) Britain _____
- 10) Cuba _____
- 11) Mexico _____
- 12) Egypt _____
- 13) Alaska is _____ of the rest of the United States?
A. north B. west C. east D. south
- 14) Which is not part of North America?
A. Japan B. Canada C. Alaska D. The United States
- 15) Which country is closest to the state of Florida?
A. Britain B. Japan C. Cuba D. Mexico
- 16) Which country attacked the United State's base at Pearl Harbor during World War 2?
A. Japan B. Canada C. Mexico D. Britain
- 17) Who was the United States of America at war with during the American Revolution?
A. China B. Mexico C. Britain D. France



Using the map below, determine which letter represents each location.



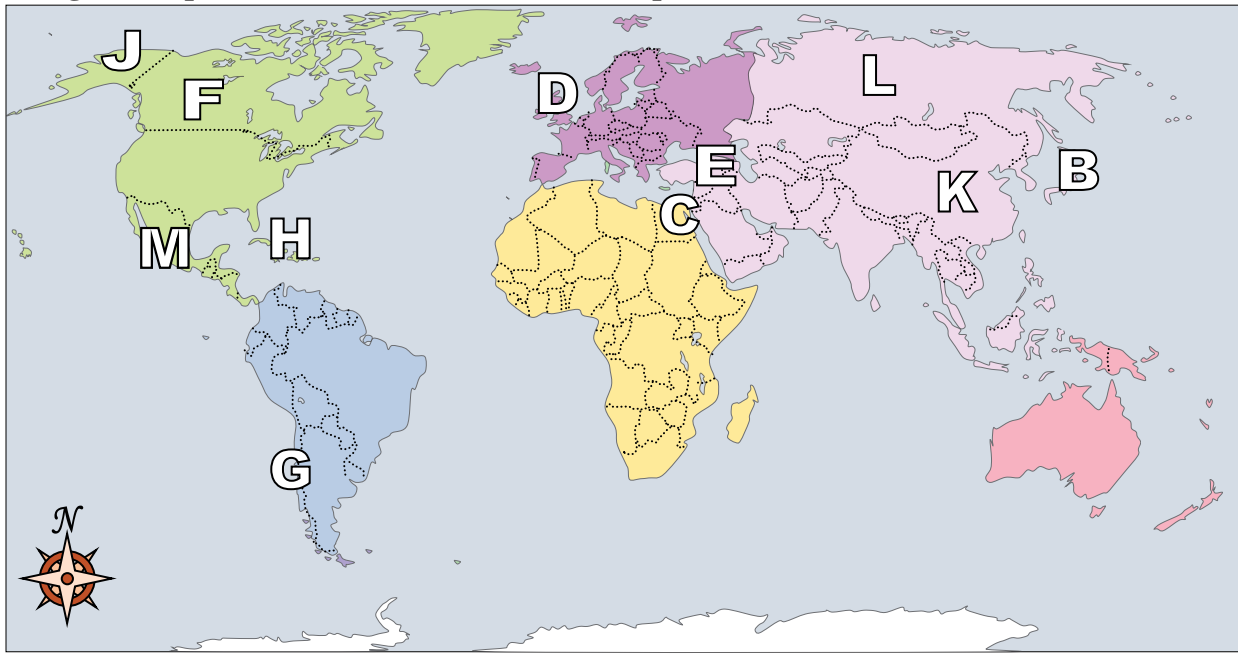
Answers

- 1) Japan E
- 2) Alaska (State) L
- 3) Russia K
- 4) United Kingdom H
- 5) Iraq F
- 6) Canada C
- 7) China B
- 8) Chile D
- 9) Britain G
- 10) Cuba M
- 11) Mexico J
- 12) Egypt A
- 13) Alaska is _____ of the rest of the United States?
A. north B. west C. east D. south
- 14) Which is not part of North America?
A. Japan B. Canada C. Alaska D. The United States
- 15) Which country is closest to the state of Florida?
A. Britain B. Japan C. Cuba D. Mexico
- 16) Which country attacked the United State's base at Pearl Harbor during World War 2?
A. Japan B. Canada C. Mexico D. Britain
- 17) Who was the United States of America at war with during the American Revolution?
A. China B. Mexico C. Britain D. France

- 1. E
- 2. L
- 3. K
- 4. H
- 5. F
- 6. C
- 7. B
- 8. D
- 9. G
- 10. M
- 11. J
- 12. A
- 13. A
- 14. A
- 15. C
- 16. A
- 17. C



Using the map below, determine which letter represents each location.



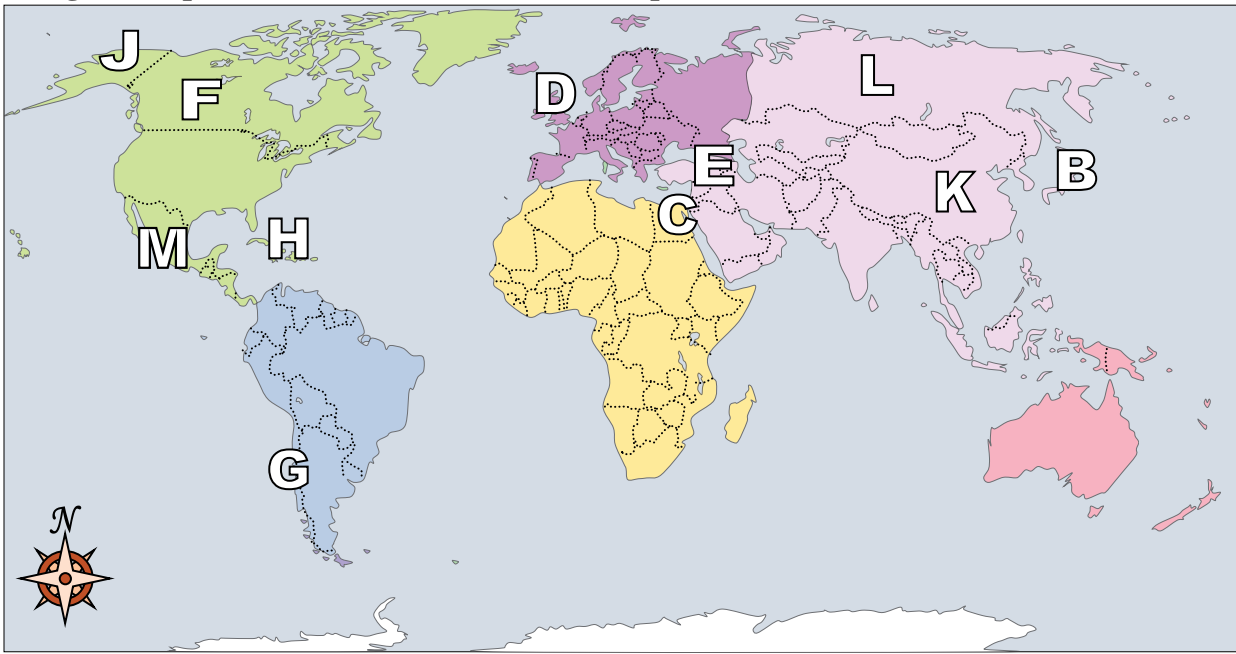
Answers

1. _____
2. _____
3. _____
4. _____
5. _____
6. _____
7. _____
8. _____
9. _____
10. _____
11. _____
12. _____
13. _____
14. _____
15. _____
16. _____
17. _____

- 1) United Kingdom _____
- 2) Russia _____
- 3) Egypt _____
- 4) Iraq _____
- 5) Alaska (State) _____
- 6) Cuba _____
- 7) Britain _____
- 8) Mexico _____
- 9) Chile _____
- 10) Canada _____
- 11) Japan _____
- 12) China _____
- 13) Which country touches the USA's northern border?
A. Egypt B. Canada C. Mexico D. China
- 14) Who was the United States of America at war with during the American Revolution?
A. China B. Britain C. Canada D. Mexico
- 15) Alaska is _____ of the rest of the United States?
A. north B. west C. east D. south
- 16) If you wanted to see pyramids where should you go?
A. Britain B. Japan C. Mexico D. Egypt
- 17) Which country is closest to the state of Florida?
A. Mexico B. Japan C. Britain D. Cuba



Using the map below, determine which letter represents each location.



Answers

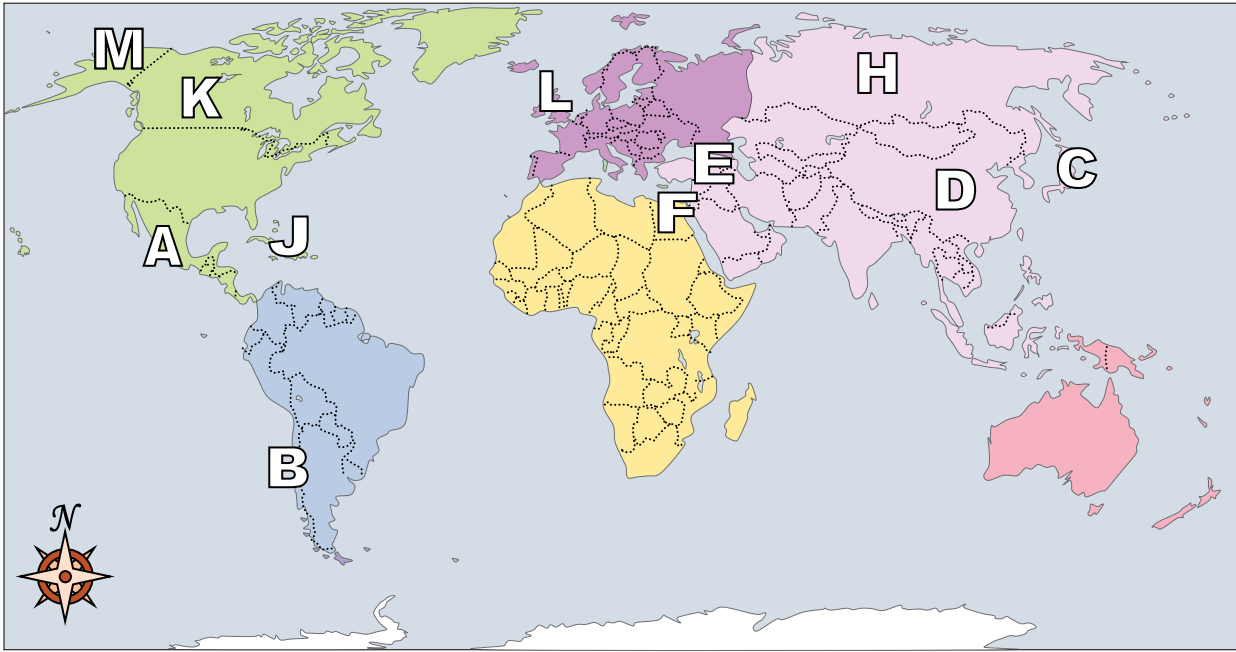
- 1) United Kingdom D
- 2) Russia L
- 3) Egypt C
- 4) Iraq E
- 5) Alaska (State) J
- 6) Cuba H
- 7) Britain A
- 8) Mexico M
- 9) Chile G
- 10) Canada F
- 11) Japan B
- 12) China K

- 13) Which country touches the USA's northern border?
A. Egypt B. Canada C. Mexico D. China
- 14) Who was the United States of America at war with during the American Revolution?
A. China B. Britain C. Canada D. Mexico
- 15) Alaska is _____ of the rest of the United States?
A. north B. west C. east D. south
- 16) If you wanted to see pyramids where should you go?
A. Britain B. Japan C. Mexico D. Egypt
- 17) Which country is closest to the state of Florida?
A. Mexico B. Japan C. Britain D. Cuba

- 1. D
- 2. L
- 3. C
- 4. E
- 5. J
- 6. H
- 7. A
- 8. M
- 9. G
- 10. F
- 11. B
- 12. K
- 13. B
- 14. B
- 15. A
- 16. D
- 17. D



Using the map below, determine which letter represents each location.



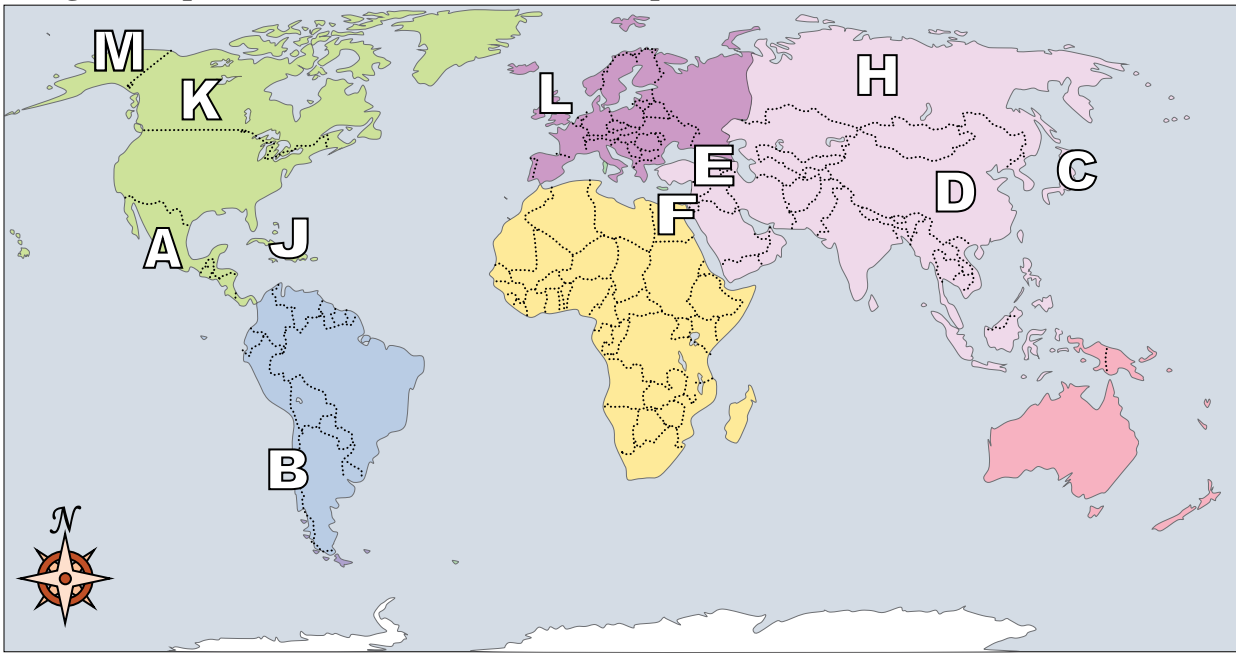
Answers

1. _____
2. _____
3. _____
4. _____
5. _____
6. _____
7. _____
8. _____
9. _____
10. _____
11. _____
12. _____
13. _____
14. _____
15. _____
16. _____
17. _____

- 1) Alaska (State) _____
- 2) Russia _____
- 3) United Kingdom _____
- 4) Cuba _____
- 5) Chile _____
- 6) Mexico _____
- 7) Japan _____
- 8) Iraq _____
- 9) Britain _____
- 10) China _____
- 11) Egypt _____
- 12) Canada _____
- 13) Which country is the largest in Asia?
A. Egypt B. Britain C. Russia D. Mexico
- 14) Which country attacked the United State's base at Pearl Harbor during World War 2?
A. China B. Japan C. Egypt D. Britain
- 15) Which country touches the USA's southern border?
A. Mexico B. Egypt C. Japan D. Canada
- 16) Which is not part of North America?
A. The United States B. Mexico C. Canada D. China
- 17) Which country touches the USA's northern border?
A. China B. Canada C. Japan D. France



Using the map below, determine which letter represents each location.



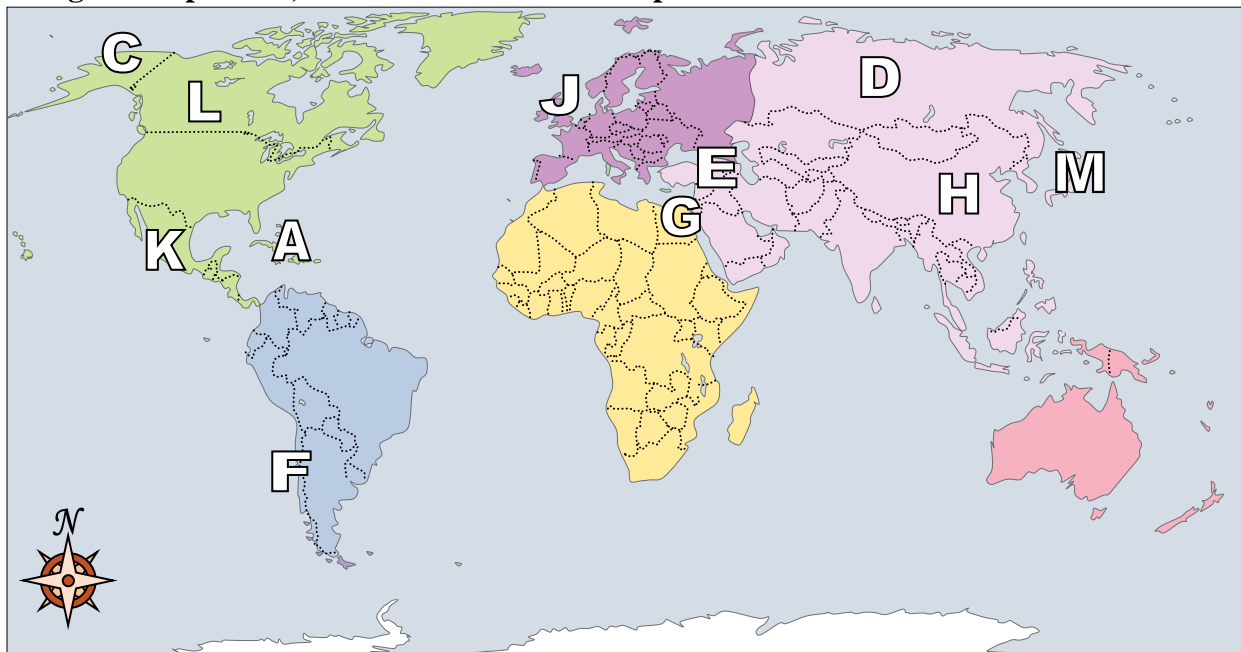
Answers

- 1) Alaska (State) M
- 2) Russia H
- 3) United Kingdom L
- 4) Cuba J
- 5) Chile B
- 6) Mexico A
- 7) Japan C
- 8) Iraq E
- 9) Britain G
- 10) China D
- 11) Egypt F
- 12) Canada K
- 13) Which country is the largest in Asia?
A. Egypt B. Britain C. Russia D. Mexico
- 14) Which country attacked the United State's base at Pearl Harbor during World War 2?
A. China B. Japan C. Egypt D. Britain
- 15) Which country touches the USA's southern border?
A. Mexico B. Egypt C. Japan D. Canada
- 16) Which is not part of North America?
A. The United States B. Mexico C. Canada D. China
- 17) Which country touches the USA's northern border?
A. China B. Canada C. Japan D. France

- 1. M
- 2. H
- 3. L
- 4. J
- 5. B
- 6. A
- 7. C
- 8. E
- 9. G
- 10. D
- 11. F
- 12. K
- 13. C
- 14. B
- 15. A
- 16. D
- 17. B



Using the map below, determine which letter represents each location.



Answers

1. _____

2. _____

3. _____

4. _____

5. _____

6. _____

7. _____

8. _____

9. _____

10. _____

11. _____

12. _____

13. _____

14. _____

15. _____

16. _____

17. _____

- 1) Mexico _____
- 2) Chile _____
- 3) Cuba _____
- 4) Iraq _____
- 5) China _____
- 6) Egypt _____
- 7) Canada _____
- 8) Alaska (State) _____
- 9) Britain _____
- 10) United Kingdom _____
- 11) Russia _____
- 12) Japan _____

13) Which is not part of North America?

- A. The United States
- B. Mexico
- C. China
- D. Canada

14) Who was the United States of America at war with during the American Revolution?

- A. Britain
- B. Egypt
- C. Mexico
- D. China

15) If you wanted to see pyramids where should you go?

- A. Mexico
- B. Japan
- C. Egypt
- D. Canada

16) The state of Alaska is touching which country?

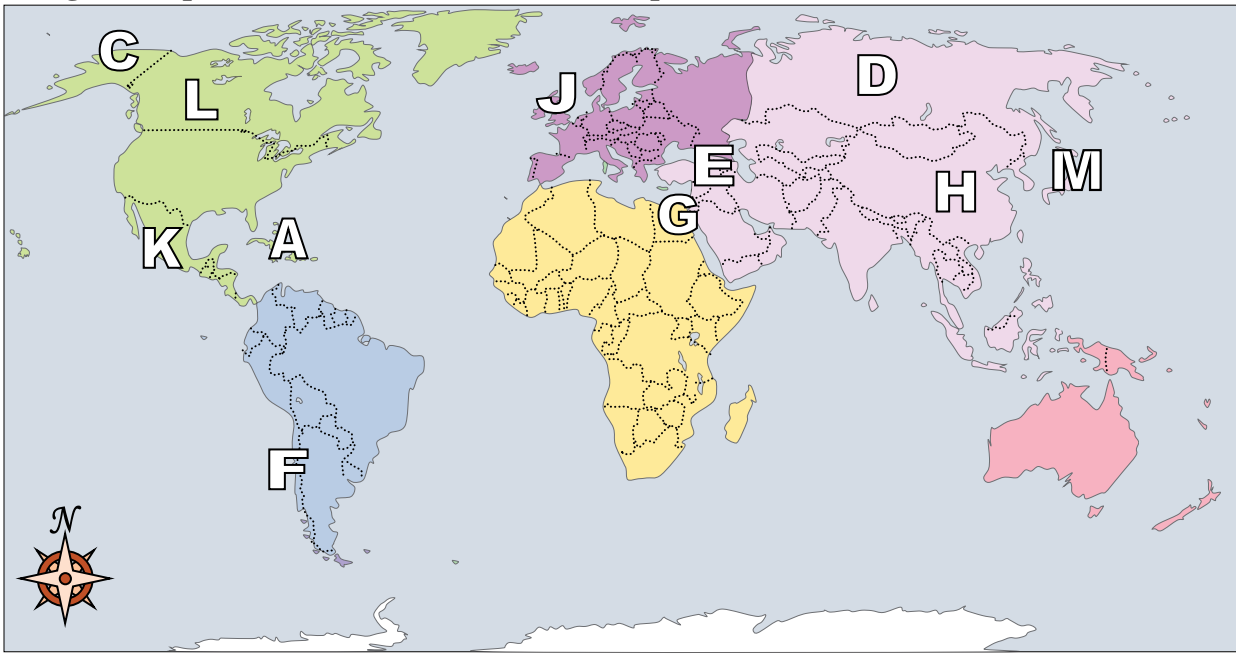
- A. China
- B. Britain
- C. Canada
- D. Japan

17) Alaska is _____ of the rest of the United States?

- A. north
- B. east
- C. south
- D. west



Using the map below, determine which letter represents each location.



Answers

- 1) Mexico K
- 2) Chile F
- 3) Cuba A
- 4) Iraq E
- 5) China H
- 6) Egypt G
- 7) Canada L
- 8) Alaska (State) C
- 9) Britain B
- 10) United Kingdom J
- 11) Russia D
- 12) Japan M

- 13) Which is not part of North America?
A. The United States B. Mexico C. China D. Canada
- 14) Who was the United States of America at war with during the American Revolution?
A. Britain B. Egypt C. Mexico D. China
- 15) If you wanted to see pyramids where should you go?
A. Mexico B. Japan C. Egypt D. Canada
- 16) The state of Alaska is touching which country?
A. China B. Britain C. Canada D. Japan
- 17) Alaska is _____ of the rest of the United States?
A. north B. east C. south D. west

- 1. K
- 2. F
- 3. A
- 4. E
- 5. H
- 6. G
- 7. L
- 8. C
- 9. B
- 10. J
- 11. D
- 12. M
- 13. C
- 14. A
- 15. C
- 16. C
- 17. A